



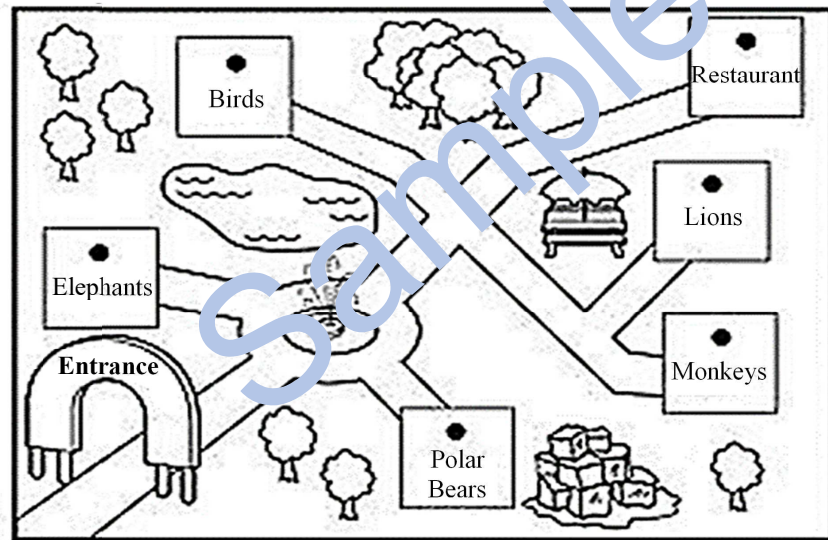
Life Skills 2 (Beginning Knowledge and Creative Arts) – Grade 2

Welcome to your Conquesta Olympiad.
Read all the questions carefully.
(Teachers may read all text out aloud.)
You must decide which is the correct
answer for each question – and draw a
circle around (a), (b), (c) or (d) on the
right hand side of each question.
You may only choose one answer for
each question.













<u>Example:</u> The sun is a 	(a) moon	(b) planet	<input checked="" type="radio"/> (c) star	(d) meteor
---	-------------	---------------	--	---------------

Study the diagram below and circle the correct answers for questions 1 – 8.



1.	I go in at the entrance and turn right at the fountain. I will see the	(a) elephants	(b) polar bears	(c) birds	(d) monkeys
----	--	------------------	--------------------	--------------	----------------

2.	The <u>opposite</u> of 'entrance' is	(a) go	(b) escape	(c) come in	(d) exit
3.	What sign usually represents a restaurant?	(a) 	(b) 	(c) 	(d) 
4.	The restaurant is	(a) the closest to the entrance	(b) next to the birds	(c) at the far end of the zoo	(d) next to the monkeys
5.	Which symbol would I use on the map for polar bears?	(a) 	(b) 	(c) 	(d) 
6.	What sound does a lion make?	(a) 	(b) trumpet	(c) roar	(d) chatter
7.	A baby lion is called a	(a) cub	(b) calf	(c) lioness	(d) pup
8.	What does this sign mean on the map? 	(a) You can suntan here.	(b) You can have a picnic here.	(c) You can feed the birds here.	(d) The monkeys sit here when it rains.