

Please return papers in STRICT NUMERICAL ORDER by student number. If a student writes more than one subject, please keep his/her papers together. Thank you.



Mathematics – Grade 2

Welcome to your Conquesta Olympiad.
Read all the questions carefully.

(Teacher assistance allowed.)

You must decide which is the correct answer for each question – and draw a circle around (a), (b), (c) or (d) on the right hand side of each question.


You may only choose one answer for each question.

SAMPLE

<u>Example:</u>	(a) 7	(b) 8	(c) <u>6</u>	(d) 24
$2 + 4 = \dots\dots$				





Uncle Sam has a dairy farm.
I love going to the farm in the school holidays.

The cows get taken into the milk shed at 4.30 every day to be milked.



Circle the correct answers for questions 1 – 7.

1.	<ul style="list-style-type: none"> • There are 68 cows in a field. • 25 cows join them. • Then 6 cows leave the field. <p>How many cows are in the field now?</p>	(a) 76	(b) 85	(c) 87	(d) 89
2.	<p>There are 15 cows standing under a tree.</p> <p>How many ears can I see?</p>	(a) 30	(b) 13	(c) 24	(d) 36
3.	<ul style="list-style-type: none"> • The fattest cow weighs 95kg. • The lightest cow weighs 76kg. <p>What is the <u>difference</u> in their weight?</p>	(a) 29kg	(b) 25kg	(c) 19kg	(d) 21kg

4.	<p>Which clock shows the time the cows get taken into the milk shed every day?</p>	(a) 	(b) 	(c) 	(d) 
5.	<p>How many minutes in an hour?</p>	(a) 24	(b) 365	(c) 60	(d) 7
6.	<p>Choose the correct order from the beginning of the year according to the calendar.</p>	(a) Christmas, July holidays, New Years day, Youth day	(b) New Years day, Youth day, July holidays, Christmas	(c) New Years day, Christmas, Youth day, July holidays	(d) July holidays, New Years day, Youth day, Christmas
7.	<p>21 days = weeks.</p>	(a) 24	(b) 3	(c) 365	(d) 12

The cow's milk is put into a milk truck and taken to the dairy.
Look at the milk truck. The back has a special shape.



Circle the correct answers for questions 8 + 9.

8.	<p>What shape is the back of the truck?</p>	(a) square	(b) cylinder	(c) cube	(d) kite
9.	<p>We say this truck is carrying 36 000..... of milk.</p>	(a) hours	(b) kilometres	(c) centimetres	(d) litres